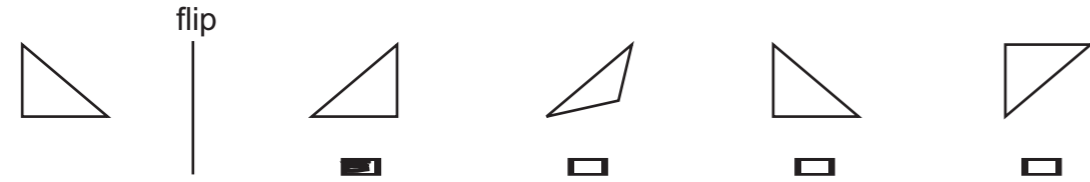
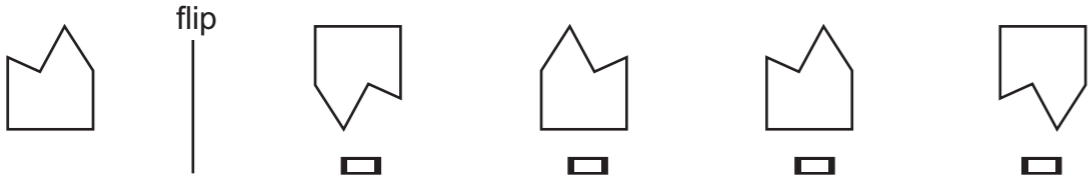
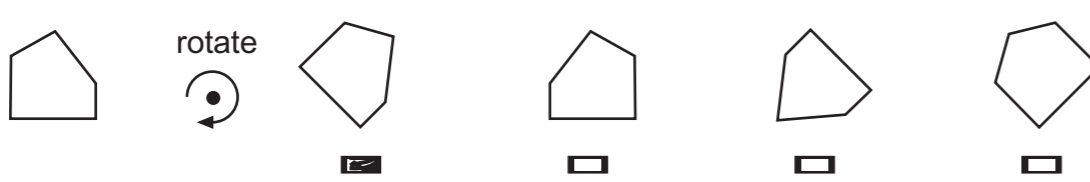





13 

14 

15 

16 

17 

18 

**Answers:**

- 2. 9
- 3. 8. special.
- 4. 4,000
- 5. 10. jacket.
- 6. 18
- 7. 12. Night-time
- 8. 14. 2nd option
- 9. 16. 3rd option
- 10. 18. 2nd option
- 11. 7. festooned.
- 12. was approaching

Student Details:

# Selective Assessment Sample Sheet

This sample sheet is designed to inform parents and candidates about the 2010 entrance test in order to

- Give a feel for the appearance of the actual assessment.
- Introduce some of the symbols and phrases used in the assessment.
- Inform parents and candidates of the invigilation procedure.
- Indicate the range of disciplines that will be tested.
- Highlight the range of answer formats used in the test.

This sheet also includes examples to indicate the range of skills required to complete the assessment and the manner in which questions are answered. This sample sheet is NOT definitive and the inclusion of any question types does not imply that they will be found in the final assessment.

**There are no practice test papers provided for these assessments.**

- The page number appears at the top corner of each page.
- The title of each section is provided on the top line of each page.

Instructions at the bottom of page inform you:

- if you can continue to the next page;
- when you have reached the end of a section;
- when you must wait for further instructions.

Times for each section are provided on each example page.

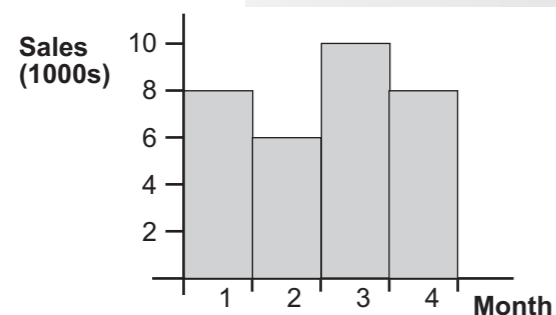
Continue to the next page 

- There are two papers, each administered in under an hour.
- Instructions are provided by a prepared audio soundtrack.
- Before the assessment begins, you are asked to check your personal details on the front cover and check that the booklet is complete.
- There is no separate answer sheet. Answers are written on the booklet.
- Each assessment is made up of several individually timed sections.
- There are examples describing how to answer the questions at the start of each section.
- The candidates can refer back to the examples page as often as they wish.
- Before each section starts, the candidate will be told the time available for the section and the number of questions to complete in that time.
- Candidates should attempt as many questions as they can. If they find a question they cannot answer, they should move onto the next question until they reach the end of the section.
- If there is time left at the end of a section, they should go back and answer any questions they have missed, but within that section only.

**There are sections which test numerical reasoning.**

Jasper is 5 years older than Ryan, and Ryan is 2 years younger than Juan. If Jasper is 14 then:

- 1 How old is Juan ?
- 2 How old is Ryan ?



The graph shows the number of computer games sold by a supermarket over a 4 month period.

- 3 How many were sold in the final month?
- 4 What is the difference between the highest and lowest recorded monthly figures?

Which of the following numbers is a multiple of 3 and a multiple of 9

- 5  15  17  22  27
- 6  12  18  21  33

Choose the correct words that complete the passage.

Religious, civil  but  and  with military ceremonies took  place  charge in Venice  off

throughout the  thirteen  future  twelve months of the year. Public buildings

- 7 were  destroyed  festooned  hoisted with flags for these  unusual  simple  special occasions.

Complete the word on the right so that it means the same as the word on the left:

- 9 Boat
- 10 Coat

It was already candle-light when we reached the hamlet, and I shall never forget how much I cheered to see the yellow shine in doors and windows.

- 11 What does the word 'hamlet' mean?
- An old building.
  - A small collection of houses.
  - A farm.
  - A large town.
- 12 What is meant by the phrase "It was already candle-light"?
- The person could see many candles.
  - Night time was approaching.
  - Everything was prepared for lighting the candle.
  - The candle was already lit.